





Name: \_\_\_\_\_ Datum: \_\_\_\_\_ Klasse: \_\_\_\_\_


## Minusaufgaben bis 10 / Übung 3


1)   $8 - 3 - 2 = \underline{\quad}$


  $8 - 5 - 3 = \underline{\quad}$


2)   $8 - 2 - 1 = \underline{\quad}$


  $8 - 4 - 2 = \underline{\quad}$


3)   $9 - 1 - 4 = \underline{\quad}$


  $9 - 2 - 7 = \underline{\quad}$


4)   $9 - 4 - 2 = \underline{\quad}$


  $9 - 2 - 5 = \underline{\quad}$

5)   $9 - 4 - 3 = \underline{\quad}$

  $9 - 5 - 3 = \underline{\quad}$


6)   $9 - 1 - 6 = \underline{\quad}$


  $9 - 0 - 7 = \underline{\quad}$


7)   $10 - 2 - 3 = \underline{\quad}$


  $10 - 3 - 5 = \underline{\quad}$


8)   $10 - 1 - 7 = \underline{\quad}$

  $10 - 4 - 4 = \underline{\quad}$

9)   $10 - 3 - 4 = \underline{\quad}$

  $10 - 2 - 7 = \underline{\quad}$

10)   $10 - 2 - 6 = \underline{\quad}$

  $10 - 2 - 8 = \underline{\quad}$